

M E T U - N C C
Mathematics Group

Calculus with Analytic Geometry					
Second Midterm Exam					
Code	: MATH 119	Last Name :			
Acad. Year	: 2011 - 2012	Name :		Stud. No :	
Semester	: Spring	Dept. :		Sec. No :	
Coord.	: S.D./H.T.	Signature :			
Date	: 28.04.2012	6 Questions on 6 Pages Total 100 Points			
Time	: 14.40				
Duration	: 120 minutes				
Q1	Q2	Q3	Q4	Q5	Q6

Q.1 (12 + 3 = 15 pts) By applying the Mean Value Theorem to $f(x) = \cos x + \frac{x^2}{2}$ on the interval $[0, x]$, and using the known inequality $x > \sin x$ for $x > 0$;

(a) Show that $\cos x > 1 - \frac{x^2}{2}$ for $x > 0$.

Let $f(x) = \cos x + \frac{x^2}{2}$. We have $f(0) = 1$ &

$f'(x) = -\sin x + x > 0$ for $x > 0$ since $x > \sin x$ for $x > 0$.

So $f(x)$ is increasing for all $x \in (0, \infty)$ & since $f(0) = 1$
we get

$f(x) > 1$ for all $x > 0 \Leftrightarrow \cos x > 1 - \frac{x^2}{2}$ for all $x > 0$

(b) Explain why the result of Part (a) is ALSO true for $x < 0$.

$f(x) = \cos x + \frac{x^2}{2}$ is an even function, so the result holds also for $x < 0$

Q.2 (4 × 5 = 20 pts) Consider the function $y = f(x) = \frac{x^2}{(x-2)^2}$.

(a) Write down the domain of the function, and find its asymptotes.

$$\text{Dom } f = \mathbb{R} - \{2\}$$

$$\lim_{x \rightarrow \pm\infty} f(x) = 1$$

$$\lim_{x \rightarrow 2^+} f(x) = \infty$$

$$\lim_{x \rightarrow 2^-} f(x) = \infty$$

(b) Find intervals of increase and decrease.

$$f'(x) = \frac{2x(x-2)^2 - x^2 \cdot 2(x-2)}{(x-2)^4} = \frac{2x(x-2)(x-2-x)}{(x-2)^4} = \frac{-4x(x-2)}{(x-2)^4}$$

	0	2	
$f'(x)$	-	+	-
$f(x)$	Dec	Inc	Dec

(c) Find local maximum and minimum points if there is any.

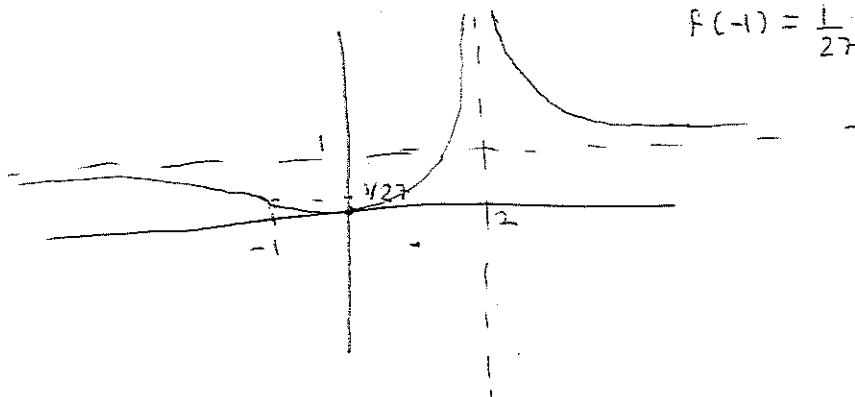
$x=0$ is a local min point

(d) Find intervals of concavity. Is there any inflection points?

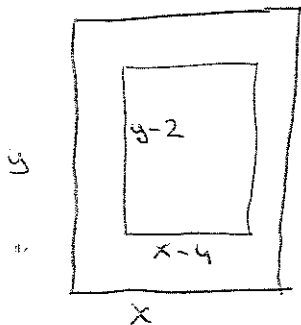
$$f''(x) = \frac{-4(x-2)^3 + 4x \cdot 3(x-2)^2}{(x-2)^6} = \frac{8x+8}{(x-2)^4}$$

	-1	2	
$f''(x)$	-	+	+
$f(x)$	C.D.	C.U.	C.U.

(e) Sketch its graph. \downarrow Inf Point



Q.3 (15 pts) The top-bottom margins of a poster are 1cm, and left-right margins are 2cm. The printed area of the poster will be 32cm^2 . Find the dimensions x and y of the poster which minimize the total area A of the poster. (JUSTIFY your ANSWERS !!!)



$$(x-4)(y-2) = 32$$

$$xy - 4y - 2x + 8 = 32$$

$$y(x-4) = 2x + 24$$

$$y = \frac{2x+24}{x-4}$$

$$A = xy = \frac{2x^2 + 24x}{x-4}, \quad x > 4.$$

$$A'(x) = \frac{(\cancel{4}x + 24)(x-4) - (2x^2 + 24x)}{(x-4)^2}$$

$$A'(x) = \frac{2x^2 + \cancel{16}x - 96}{(x-4)^2}$$

Crit Points

$$x=4 \quad \& \quad 2x^2 - 16x - 96 = 0$$

$$2(x^2 - 8x - 48) = 0$$

$$2(x-12)(x+4) = 0$$

$$\begin{array}{cc} \downarrow & \downarrow \\ x=12 & x=-4 \end{array}$$

Since $x > 4$, the only crit. point is $x=12$.

For $4 < x < 12$, $A'(x) < 0$
 For $12 < x$, $A'(x) > 0$ } \Rightarrow So $A(x)$ has a global min at $x=12$

Dimensions: $x=12$ & $y=6$.

Q.4 (5 × 3 = 15 pts) This problem has three INDEPENDENT parts.

(a) Find $F(\pi/2)$ and $F'(x)$, if $F(x) = \int_{\sin x}^1 \sqrt{1-t^2} dt$.

$$F(\pi/2) = \int_1^1 \sqrt{1-t^2} dt = 0$$

$$F(x) = - \int_1^{\sin x} \sqrt{1-t^2} dt \Rightarrow F'(x) = - \sqrt{1-\sin^2 x} = \cos x$$

↑
FTC

(b) Find $F(0)$ and $F'(x)$, if $F(x) = \int_{x^2-1}^{\cos x} t^3 \sin(t^2) dt$.

$$F(0) = \int_{-1}^1 t^3 \sin(t^2) dt = 0 \leftarrow \text{since } t^3 \sin(t^2) \text{ is an odd function}$$

$$F(x) = - \int_0^{x^2-1} t^3 \sin(t^2) dt + \int_0^{\cos x} t^3 \sin(t^2) dt$$

$$F'(x) = - (x^2-1)^3 \sin(x^2-1)^2 \cdot 2x + \cos^3 x \cdot \sin(\cos^2 x) \cdot (-\sin x)$$

(c) An object moves along a line with a velocity $v(t) = -t^2 + 6t - 8$ at time t . Find the DISTANCE travelled by the object during the time period $0 \leq t \leq 4$.

$$\text{Distance Travel} = d = \int_0^4 |v(t)| dt$$

$$v(t) = -t^2 + 6t - 8 = -(t-2)(t-4)$$

	0	2	4
$v(t)$		-	+

$$\text{So } \int_0^4 |v(t)| dt = - \int_0^2 (-t^2 + 6t - 8) dt + \int_2^4 (-t^2 + 6t - 8) dt$$

$$= \left. \frac{1}{3}t^3 + 3t^2 + 8t \right|_0^2 + \left. -\frac{1}{3}t^3 + 3t^2 - 8t \right|_2^4$$

$$= \left(\frac{8}{3} + 12 + 16 \right) + \left(-\frac{64}{3} + 48 - 32 \right) - \left(-\frac{8}{3} + 12 - 16 \right)$$

Last Name:

Name:

Q.5 (7 + 8 = 15 pts) Consider the plane region \mathcal{R} lying to the RIGHT of the parabola $x - y^2 + 4 = 0$ and to the LEFT of the straightline $x - y + 2 = 0$.

(a) Express the AREA of \mathcal{R} as an integral in the x direction, i.e., as an integral with respect to x . (DO NOT evaluate the integral)

$$x = y^2 - 4 \quad \& \quad x = y - 2$$

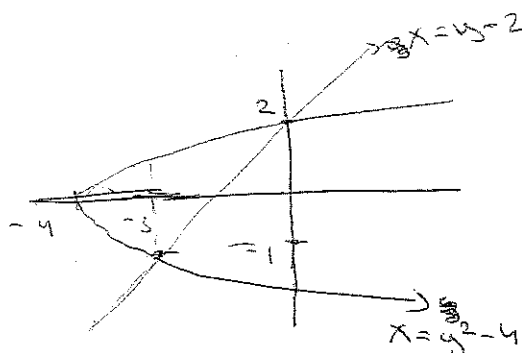
Intersection points

$$y^2 - 4 = y - 2$$

$$y^2 - y - 2 = 0$$

$$(y - 2)(y + 1) = 0$$

$$y = 2 \quad \& \quad y = -1$$



$$A = \int_{-4}^{-3} (\sqrt{x+4} - (-\sqrt{x+4})) dx + \int_{-3}^{-2} (\sqrt{x+4} - (x+2)) dx$$

(b) Calculate the AREA of \mathcal{R} by an integral in the y direction. (DO evaluate the integral finding its numerical value)

$$A = \int_{-1}^2 [(y-2) - (y^2-4)] dy = \int_{-1}^2 (-y^2 + y + 2) dy$$

$$= \left[-\frac{y^3}{3} + \frac{y^2}{2} + 2y \right]_{-1}^2 = \left(-\frac{8}{3} + 2 + 4 \right) - \left(+\frac{1}{3} + \frac{1}{2} - 2 \right)$$

Q.6 (5 × 4 = 20 pts) Evaluate the following integrals:

$$(a) \int x^2(1+2x)^{1/3} dx = \int \frac{(u-1)^2}{8} u^{1/3} du = \frac{1}{8} \int (u^{7/3} - 2u^{4/3} + u^{1/3}) du$$

$$u = 1+2x \Rightarrow du = 2dx$$

$$x = \frac{(u-1)}{2}$$

$$= \frac{1}{8} \left(\frac{3}{10} (1+2x)^{10/3} - 2 \cdot \frac{3}{7} (1+2x)^{7/3} + \frac{3}{4} (1+2x)^{4/3} \right) + C$$

$$(b) \int \frac{\cos(\sqrt{x}+3)}{\sqrt{x}} dx = 2 \int \cos(u) du = 2 \sin(\sqrt{x}+3) + C$$

$$u = \sqrt{x} + 3$$

$$du = \frac{1}{2\sqrt{x}} \cdot dx$$

$$(c) \int_{-\pi}^{\pi} [\sin(x^3) + 1] dx = \int_{-\pi}^{\pi} \sin(x^3) dx + \int_{-\pi}^{\pi} 1 dx = 0 + 2\pi$$

$$f(x) = \sin(x^3)$$

$$f(-x) = \sin(-x^3)$$

$$\underline{f(-x) = -\sin(x^3) = -f(x)}$$

odd function

$$(d) \int_{-\sqrt{3}}^{\sqrt{3}} \sqrt{x^2+x^4} dx = \int_{-\sqrt{3}}^{\sqrt{3}} |x| \sqrt{1+x^2} dx = \int_{-\sqrt{3}}^0 -x \sqrt{1+x^2} dx + \int_0^{\sqrt{3}} x \sqrt{1+x^2} dx$$

$$\int x \sqrt{1+x^2} dx = \frac{1}{2} \int u^{1/2} du$$

$$u = 1+x^2$$

$$du = 2x dx$$

$$= \frac{1}{2} \cdot \frac{2}{3} u^{3/2} + C$$

$$= \frac{1}{3} (1+x^2)^{3/2} + C$$

$$= -\frac{1}{3} (1+x^2)^{3/2} \Big|_{-\sqrt{3}}^0 + \frac{1}{3} (1+x^2)^{3/2} \Big|_0^{\sqrt{3}}$$