

M E T U
Northern Cyprus Campus

Math 219		Differential Equations		Final Exam		31.04.2014	
Last Name:			Dept./Sec.:			Signature	
Name : KEY			Time : 09:00				
Student No:			Duration : 100 minutes				
5 QUESTIONS						TOTAL 100 POINTS	
1	2	3	4	5			

Q1 (15pts.) Determine a suitable form for a special solution $Y(t)$ of the differential equation $y^{(4)} - 2y'' + y = \cos(t) + e^{2t} + e^t$ based on Method of Undetermined Coefficients. Do not evaluate the constants.

$$\textcircled{5} \quad y^{(4)} - 2y'' + y = 0 \Rightarrow \lambda^4 - 2\lambda^2 + 1 = 0, \quad (\lambda^2 - 1)^2 = 0$$

$$\Rightarrow \lambda = 1, -1 \Rightarrow y_h = c_1 e^t + c_2 t e^t + c_3 e^{-t} + c_4 t e^{-t}$$

$$\textcircled{5} \quad \left\{ \begin{array}{l} \cos(t) \rightarrow Y_1(t) = A \cos(t) + B \sin(t) \\ e^{2t} \rightarrow Y_2(t) = C e^{2t} \end{array} \right.$$

$$\textcircled{5} \quad e^t \rightarrow Y_3(t) = D \cdot e^t \cdot t^2 \quad (\text{duplication})$$

Hence

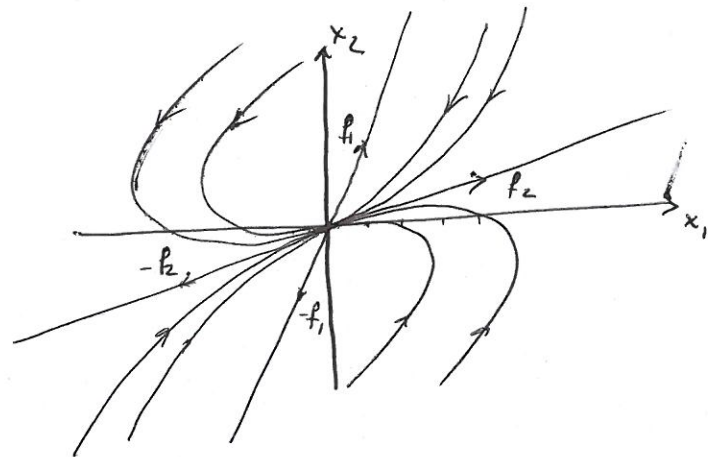
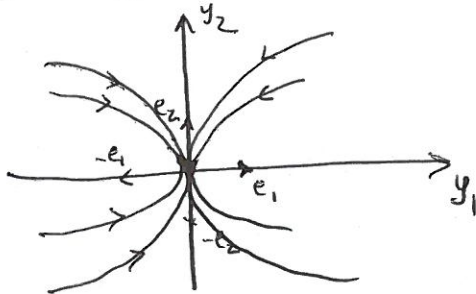
$$Y(t) = A \cos(t) + B \sin(t) + C e^{2t} + D e^t \cdot t^2$$

Q2 (20=5+5+10 pts.) Sketch the phase portrait of 2×2 -linear system $x'(t) = Ax(t)$ with constant matrix $A \in M_2(\mathbb{R})$ whose Jordan matrix J and the matrix P of (generalized) eigenvectors are given below:

a) $J = \begin{bmatrix} -3 & 0 \\ 0 & -1 \end{bmatrix}$ and $P = \begin{bmatrix} 1 & 4 \\ 2 & 1 \end{bmatrix}$.

$y_2 = c y_1^{1/3}$

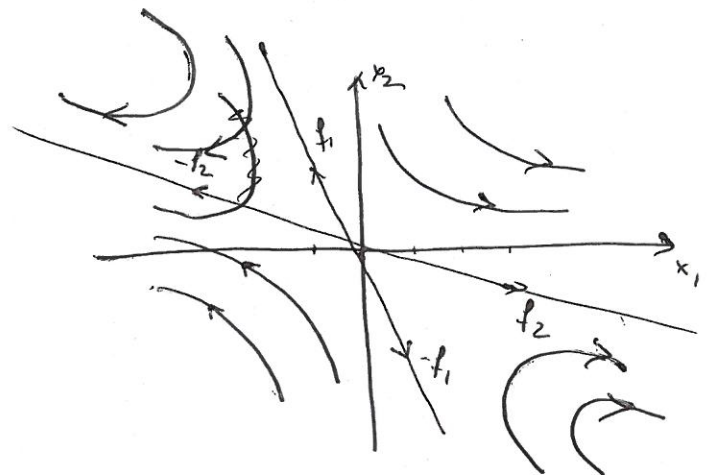
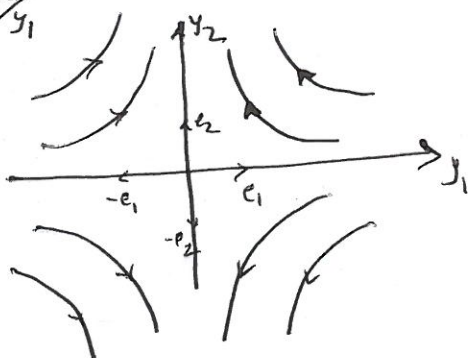
(5)



b) $J = \begin{bmatrix} -2 & 0 \\ 0 & 2 \end{bmatrix}$ and $P = \begin{bmatrix} -1 & 3 \\ 2 & -1 \end{bmatrix}$.

$y_2 = \frac{c}{y_1}$

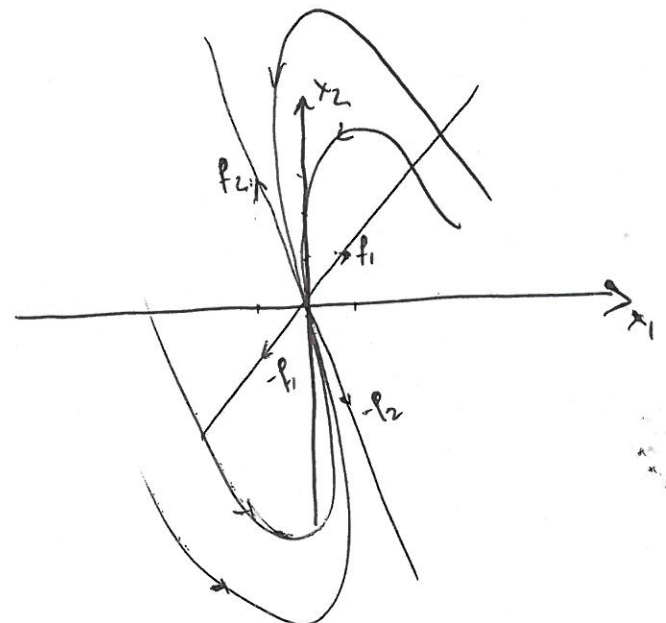
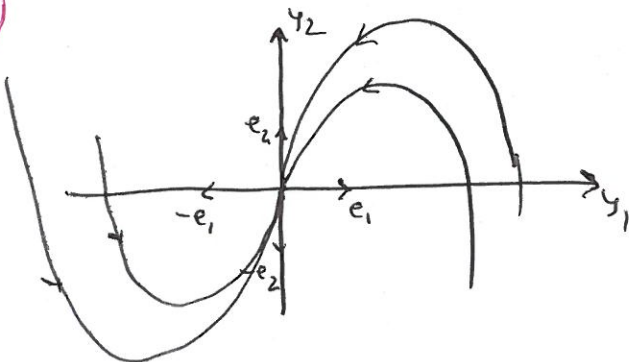
(5)



c) $J = \begin{bmatrix} -3 & 0 \\ 1 & -3 \end{bmatrix}$ and $P = \begin{bmatrix} 1 & -1 \\ 1 & 3 \end{bmatrix}$.

$y_2 = (c - \frac{1}{3} \ln|y_1|) y_1$

(10)



Q3 (20 pts.) Find the solution to the given IVP: $\begin{cases} y' = \frac{5ty^3}{\sqrt{2+t^2}}, \\ y(0) = 1. \end{cases}$

It is a separable dif. equation:

$$\frac{dy}{y^3} = \frac{5t dt}{\sqrt{2+t^2}} \Rightarrow -\frac{1}{2y^2} = \frac{10}{2} (2+t^2)^{1/2} + C \Rightarrow$$

$$-\frac{1}{y^2} = 10(2+t^2)^{1/2} + C. \quad \text{But } y(0) = 1. \quad \text{Therefore}$$

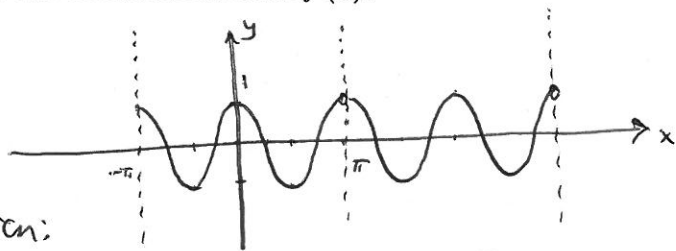
$$-1 = 10\sqrt{2} + C \Rightarrow C = -1 - 10\sqrt{2}. \quad \text{Thus}$$

$$y = \frac{1}{\sqrt{10\sqrt{2} + 1 - 10\sqrt{2+t^2}}}$$

is the solution to IVP.

Q4 (20 pts.) Find the Fourier series $S_f(x)$ of the following periodic function $f(x) = \cos(2x)$, $-\pi \leq x < \pi$ of period 2π . Sketch the graph of the extended function $f(x)$.

Since $f(x)$ is an even function, $S_f(x)$ is a cosine series of the function:



$$S_f(x) = \frac{a_0}{2} + \sum_{m=1}^{\infty} a_m \cos(mx) \quad \text{with} \quad a_0 = \frac{2}{\pi} \int_0^{\pi} \cos(2x) dx = 0,$$

$$a_n = \frac{2}{\pi} \int_0^{\pi} \cos(2x) \cos(nx) dx = \frac{1}{\pi} \int_{-\pi}^{\pi} \cos(2x) \cos(nx) dx = \begin{cases} 0, & n \neq 2 \\ 1, & n = 2. \end{cases}$$

Hence $S_f(x) = \cos(2x) = f(x)$, which is supposed to be out of uniqueness of Fourier series expansion.

Q5 (25 pts.) Find the solution to IVP: $\begin{cases} y'' + 2y' + 2y = \cos(t) + \delta(t - \pi/2), \\ y(0) = y'(0) = 0. \end{cases}$. Do not use the convolution integral.

Let's apply Laplace transform:

$$(s^2 + 2s + 2) Y(s) = \frac{s}{s^2 + 1} + e^{-\pi/2 s} \Rightarrow Y(s) =$$

$$= \frac{s}{(s^2 + 1)(s^2 + 2s + 2)} + \frac{e^{-\pi/2 s}}{s^2 + 2s + 2} \quad \text{But}$$

$$\frac{s}{(s^2 + 1)(s^2 + 2s + 2)} = \frac{As + B}{s^2 + 1} + \frac{Cs + D}{s^2 + 2s + 2} \quad \text{with } \begin{cases} A = -C \\ 2A + B + D = 0 \\ 2A + 2B + C = 1 \\ 2B + D = 0 \end{cases}$$

$$\text{Thus } A = 1/5, B = 2/5, C = -1/5, D = -4/5,$$

and

$$Y(s) = 1/5 \left(\frac{s+2}{s^2+1} - \frac{s+4}{(s+1)^2+1} \right) + \frac{e^{-\pi/2 s}}{(s+1)^2+1}, \text{ which}$$

in turn implies that

$$y(t) = 1/5 \left(\cos(t) + 2 \sin(t) - e^{-t} \cos(t) - 3e^{-t} \sin(t) \right)$$

$$+ u_{\pi/2}(t) e^{-(t-\pi/2)} \sin(t-\pi/2).$$