

## 2.5 Exercises

1–6 Write the composite function in the form  $f(g(x))$ . [Identify the inner function  $u = g(x)$  and the outer function  $y = f(u)$ .] Then find the derivative  $dy/dx$ .

1.  $y = \sin 4x$                       2.  $y = \sqrt{4 + 3x}$   
 3.  $y = (1 - x^2)^{10}$                 4.  $y = \tan(\sin x)$   
 5.  $y = \sqrt{\sin x}$                       6.  $y = \sin \sqrt{x}$

7–46 Find the derivative of the function.

7.  $F(x) = (x^4 + 3x^2 - 2)^5$         8.  $F(x) = (4x - x^2)^{100}$   
 9.  $F(x) = \sqrt[3]{1 + 2x + x^3}$         10.  $f(x) = (1 + x^4)^{2/3}$   
 11.  $g(t) = \frac{1}{(t^4 + 1)^3}$                 12.  $f(t) = \sqrt[3]{1 + \tan t}$   
 13.  $y = \cos(a^3 + x^3)$             14.  $y = a^3 + \cos^3 x$   
 15.  $y = x \sec kx$                 16.  $y = 3 \cot n\theta$   
 17.  $f(x) = (2x - 3)^4(x^2 + x + 1)^5$   
 18.  $g(x) = (x^2 + 1)^3(x^2 + 2)^6$   
 19.  $h(t) = (t + 1)^{2/3}(2t^2 - 1)^3$     20.  $F(t) = (3t - 1)^4(2t + 1)^{-3}$   
 21.  $y = \left(\frac{x^2 + 1}{x^2 - 1}\right)^3$                 22.  $f(s) = \sqrt{\frac{s^2 + 1}{s^2 + 4}}$   
 23.  $y = \sin(x \cos x)$             24.  $f(x) = \frac{x}{\sqrt{7 - 3x}}$   
 25.  $F(z) = \sqrt{\frac{z - 1}{z + 1}}$                       26.  $G(y) = \frac{(y - 1)^4}{(y^2 + 2y)^5}$   
 27.  $y = \frac{r}{\sqrt{r^2 + 1}}$                     28.  $y = \frac{\cos \pi x}{\sin \pi x + \cos \pi x}$   
 29.  $y = \sin \sqrt{1 + x^2}$                 30.  $F(v) = \left(\frac{v}{v^3 + 1}\right)^6$   
 31.  $y = \sin(\tan 2x)$                 32.  $y = \sec^2(m\theta)$   
 33.  $y = \sec^2 x + \tan^2 x$             34.  $y = x \sin \frac{1}{x}$   
 35.  $y = \left(\frac{1 - \cos 2x}{1 + \cos 2x}\right)^4$                 36.  $f(t) = \sqrt{\frac{t}{t^2 + 4}}$   
 37.  $y = \cot^2(\sin \theta)$                 38.  $y = (ax + \sqrt{x^2 + b^2})^{-2}$   
 39.  $y = [x^2 + (1 - 3x)^5]^3$         40.  $y = \sin(\sin(\sin x))$   
 41.  $y = \sqrt{x + \sqrt{x}}$                 42.  $y = \sqrt{x + \sqrt{x + \sqrt{x}}}$   
 43.  $g(x) = (2r \sin rx + n)^p$         44.  $y = \cos^4(\sin^3 x)$   
 45.  $y = \cos \sqrt{\sin(\tan \pi x)}$         46.  $y = [x + (x + \sin^2 x)^3]^4$

47–50 Find the first and second derivatives of the function.

47.  $y = \cos(x^2)$                       48.  $y = \cos^2 x$   
 49.  $H(t) = \tan 3t$                     50.  $y = \frac{4x}{\sqrt{x + 1}}$

51–54 Find an equation of the tangent line to the curve at the given point.

51.  $y = (1 + 2x)^{10}$ , (0, 1)        52.  $y = \sqrt{1 + x^3}$ , (2, 3)  
 53.  $y = \sin(\sin x)$ , ( $\pi$ , 0)        54.  $y = \sin x + \sin^2 x$ , (0, 0)

55. (a) Find an equation of the tangent line to the curve  $y = \tan(\pi x^2/4)$  at the point (1, 1).  
 (b) Illustrate part (a) by graphing the curve and the tangent line on the same screen.
56. (a) The curve  $y = |x|/\sqrt{2 - x^2}$  is called a *bullet-nose curve*. Find an equation of the tangent line to this curve at the point (1, 1).  
 (b) Illustrate part (a) by graphing the curve and the tangent line on the same screen.
57. (a) If  $f(x) = x\sqrt{2 - x^2}$ , find  $f'(x)$ .  
 (b) Check to see that your answer to part (a) is reasonable by comparing the graphs of  $f$  and  $f'$ .
58. The function  $f(x) = \sin(x + \sin 2x)$ ,  $0 \leq x \leq \pi$ , arises in applications to frequency modulation (FM) synthesis.  
 (a) Use a graph of  $f$  produced by a graphing device to make a rough sketch of the graph of  $f'$ .  
 (b) Calculate  $f'(x)$  and use this expression, with a graphing device, to graph  $f'$ . Compare with your sketch in part (a).
59. Find all points on the graph of the function  $f(x) = 2 \sin x + \sin^2 x$  at which the tangent line is horizontal.
60. Find the  $x$ -coordinates of all points on the curve  $y = \sin 2x - 2 \sin x$  at which the tangent line is horizontal.
61. If  $F(x) = f(g(x))$ , where  $f(-2) = 8$ ,  $f'(-2) = 4$ ,  $f'(5) = 3$ ,  $g(5) = -2$ , and  $g'(5) = 6$ , find  $F'(5)$ .
62. If  $h(x) = \sqrt{4 + 3f(x)}$ , where  $f(1) = 7$  and  $f'(1) = 4$ , find  $h'(1)$ .
63. A table of values for  $f$ ,  $g$ ,  $f'$ , and  $g'$  is given.

$x$	$f(x)$	$g(x)$	$f'(x)$	$g'(x)$
1	3	2	4	6
2	1	8	5	7
3	7	2	7	9

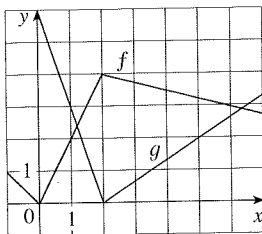
- (a) If  $h(x) = f(g(x))$ , find  $h'(1)$ .  
 (b) If  $H(x) = g(f(x))$ , find  $H'(1)$ .

64. Let  $f$  and  $g$  be the functions in Exercise 63.

- (a) If  $F(x) = f(f(x))$ , find  $F'(2)$ .  
 (b) If  $G(x) = g(g(x))$ , find  $G'(3)$ .

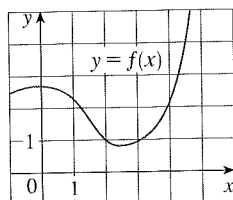
65. If  $f$  and  $g$  are the functions whose graphs are shown, let  $u(x) = f(g(x))$ ,  $v(x) = g(f(x))$ , and  $w(x) = g(g(x))$ . Find each derivative, if it exists. If it does not exist, explain why.

- (a)  $u'(1)$       (b)  $v'(1)$       (c)  $w'(1)$

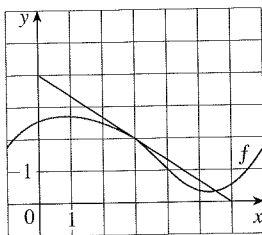


66. If  $f$  is the function whose graph is shown, let  $h(x) = f(f(x))$  and  $g(x) = f(x^2)$ . Use the graph of  $f$  to estimate the value of each derivative.

- (a)  $h'(2)$       (b)  $g'(2)$



67. If  $g(x) = \sqrt{f(x)}$ , where the graph of  $f$  is shown, evaluate  $g'(3)$ .



68. Suppose  $f$  is differentiable on  $\mathbb{R}$  and  $\alpha$  is a real number. Let  $F(x) = f(x^\alpha)$  and  $G(x) = [f(x)]^\alpha$ . Find expressions for (a)  $F'(x)$  and (b)  $G'(x)$ .

69. Let  $r(x) = f(g(h(x)))$ , where  $h(1) = 2$ ,  $g(2) = 3$ ,  $h'(1) = 4$ ,  $g'(2) = 5$ , and  $f'(3) = 6$ . Find  $r'(1)$ .

70. If  $g$  is a twice differentiable function and  $f(x) = xg(x^2)$ , find  $f''$  in terms of  $g$ ,  $g'$ , and  $g''$ .

71. If  $F(x) = f(3f(4f(x)))$ , where  $f(0) = 0$  and  $f'(0) = 2$ , find  $F'(0)$ .

72. If  $F(x) = f(xf(xf(x)))$ , where  $f(1) = 2$ ,  $f(2) = 3$ ,  $f'(1) = 4$ ,  $f'(2) = 5$ , and  $f'(3) = 6$ , find  $F'(1)$ .

73–74 Find the given derivative by finding the first few derivatives and observing the pattern that occurs.

73.  $D^{103} \cos 2x$

74.  $D^{35} x \sin \pi x$

75. The displacement of a particle on a vibrating string is given by the equation  $s(t) = 10 + \frac{1}{4} \sin(10\pi t)$  where  $s$  is measured in centimeters and  $t$  in seconds. Find the velocity of the particle after  $t$  seconds.

76. If the equation of motion of a particle is given by  $s = A \cos(\omega t + \delta)$ , the particle is said to undergo *simple harmonic motion*.

- (a) Find the velocity of the particle at time  $t$ .  
 (b) When is the velocity 0?

77. A Cepheid variable star is a star whose brightness alternately increases and decreases. The most easily visible such star is Delta Cephei, for which the interval between times of maximum brightness is 5.4 days. The average brightness of this star is 4.0 and its brightness changes by  $\pm 0.35$ . In view of these data, the brightness of Delta Cephei at time  $t$ , where  $t$  is measured in days, has been modeled by the function

$$B(t) = 4.0 + 0.35 \sin\left(\frac{2\pi t}{5.4}\right)$$

- (a) Find the rate of change of the brightness after  $t$  days.  
 (b) Find, correct to two decimal places, the rate of increase after one day.

78. In Example 4 in Section 1.3 we arrived at a model for the length of daylight (in hours) in Ankara, Turkey, on the  $t$ th day of the year:

$$L(t) = 12 + 2.8 \sin\left[\frac{2\pi}{365}(t - 80)\right]$$

Use this model to compare how the number of hours of daylight is increasing in Ankara on March 21 and May 21.

79. A particle moves along a straight line with displacement  $s(t)$ , velocity  $v(t)$ , and acceleration  $a(t)$ . Show that

$$a(t) = v(t) \frac{dv}{ds}$$

Explain the difference between the meanings of the derivatives  $dv/dt$  and  $dv/ds$ .

80. Air is being pumped into a spherical weather balloon. At any time  $t$ , the volume of the balloon is  $V(t)$  and its radius is  $r(t)$ .  
 (a) What do the derivatives  $dV/dr$  and  $dV/dt$  represent?  
 (b) Express  $dV/dt$  in terms of  $dr/dt$ .

**CAS** 81. Computer algebra systems have commands that differentiate functions, but the form of the answer may not be convenient and so further commands may be necessary to simplify the answer.

- (a) Use a CAS to find the derivative in Example 5 and compare with the answer in that example. Then use the simplify command and compare again.  
 (b) Use a CAS to find the derivative in Example 6. What happens if you use the simplify command? What happens if you use the factor command? Which form of the answer would be best for locating horizontal tangents?