

CALCULUS WITH ANALYTIC GEOMETRY MIDTERM 2							
Code : MAT 119				Last Name:			
Acad. Year: 2012-2013				Name :		Student No.:	
Semester : FALL				Department:		Section:	
Date : 22.12.2012				6 QUESTIONS ON 6 PAGES TOTAL 100 POINTS			
Time : 9:40							
Duration : 110 minutes							
1. (12)	2. (20)	3. (20)	4. (21)	5. (12)	6. (15)	Bonus	

Show your work! Please draw a box around your answers!

1. (4 × 3pts) Compute the following limits.

$$(a) \lim_{x \rightarrow \infty} \frac{(\ln x)^2}{x} \xrightarrow{\text{L'H.R.}} \lim_{x \rightarrow \infty} \frac{2 \cdot \ln x \cdot \frac{1}{x}}{1} \xrightarrow{\text{L'H.R.}} \lim_{x \rightarrow \infty} \frac{2 \cdot \frac{1}{x}}{1} = 0$$

$$(b) \lim_{x \rightarrow 1} \frac{\int_0^{\ln x} t e^t dt}{x^2 - 1} \xrightarrow[\text{FTC}]{\text{L'H.R.}} \lim_{x \rightarrow 1} \frac{\ln x \cdot e^{\ln x} \cdot \frac{1}{x}}{2x} = 0$$

$$(c) \lim_{x \rightarrow 0} (\arctan(x))^x = e^{\lim_{x \rightarrow 0} \ln(\arctan(x))^x} = e^{\lim_{x \rightarrow 0} \frac{\ln(\arctan(x))}{\frac{1}{x}}} \xrightarrow{\text{L'H.R.}} e^{\lim_{x \rightarrow 0} \frac{\frac{1}{\arctan(x)} \cdot \frac{1}{1+x^2}}{-\frac{1}{x^2}}}$$

$$= e^{\lim_{x \rightarrow 0} \frac{-x^2}{(\arctan(x))(1+x^2)}} \xrightarrow{\text{L'H.R.}} e^{\lim_{x \rightarrow 0} \frac{-2x}{\frac{1}{1+x^2} + \arctan(x) \cdot 2x}}$$

$$= e^0 = 1$$

$$(d) \lim_{x \rightarrow \infty} \arctan(x) \arcsin\left(\frac{1}{x}\right) = \lim_{x \rightarrow \infty} \arctan(x) \cdot \lim_{x \rightarrow \infty} \arcsin\left(\frac{1}{x}\right)$$

$$= \frac{\pi}{2} \cdot 0 = 0$$

2. (5×4pts) Evaluate the following integrals.

$$(a) \int \frac{(1-x)^2}{x} dx = \int \frac{1-2x+x^2}{x} dx = \int \frac{1}{x} - 2 + x dx$$

$$= \ln|x| - 2x + \frac{x^2}{2} + C$$

$$(b) \int \cos x \sec^2(\sin x) dx = \int \sec^2 u du = \tan u + C$$

say $\sin x = u$
 $\cos x dx = du$

$$= \tan(\sin(x)) + C$$

$$(c) \int \frac{x^5}{\sqrt{x^3+1}} dx = \int \frac{(u-1)}{\sqrt{u}} \frac{du}{3} = \frac{1}{3} \int \sqrt{u} - \frac{1}{\sqrt{u}} du = \frac{1}{3} \left(\frac{u^{3/2}}{3/2} - \frac{u^{1/2}}{1/2} \right) + C$$

say $x^3+1 = u$
 $3x^2 dx = du$

$$= \frac{2}{9} (x^3+1)^{3/2} - \frac{2}{3} (x^3+1)^{1/2} + C$$

$$(d) \int_0^1 \frac{x \arctan(x^2)}{1+x^4} dx = \int_0^{\pi/4} u \frac{du}{2} = \frac{u^2}{4} \Big|_0^{\pi/4} = \frac{\pi^2}{64}$$

say $\arctan(x^2) = u$
 $\frac{1}{1+x^4} \cdot 2x dx = du$

when $x=0 \Rightarrow u=0$

$x=1 \Rightarrow u = \pi/4$

$$(e) \int_{-1}^1 t^8 \sin(t^5) + |t^2+2t| dt = \int_{-1}^1 t^8 \sin(t^5) dt + \int_{-1}^1 |t^2+2t| dt$$

Since $(-t)^8 \sin((-t)^5) = -t^8 \sin(t^5)$
 it is odd function and the first
 integral becomes 0.

$$= \int_{-1}^0 -t^2 - 2t dt + \int_0^1 t^2 + 2t dt$$

$$= \left[-\frac{t^3}{3} - t^2 \right]_{-1}^0 + \left[\frac{t^3}{3} + t^2 \right]_0^1 = (0 - (-\frac{2}{3})) + (\frac{4}{3} + 0) = \frac{6}{3}$$

3. (5×4pts) Find the following derivatives.

$$(a) \frac{d}{dx} [2^{(x \ln x)}] = \ln 2 \cdot 2^{x \ln x} \cdot (1 \cdot \ln x + x \cdot \frac{1}{x})$$

$$(b) \frac{d}{dx} [\arcsin(\ln(1-x^2))] = \frac{1}{\sqrt{1-(\ln(1-x^2))^2}} \cdot \frac{1}{1-x^2} \cdot -2x$$

$$(c) \frac{d}{dx} [(\tan x)^{\arctan x}] = \frac{d}{dx} (e^{\ln(\tan x) \arctan x}) = \frac{d}{dx} e^{\arctan x \cdot \ln(\tan x)}$$

$$= e^{\arctan x \cdot \ln(\tan x)} \cdot \left(\frac{1}{1+x^2} \cdot \ln(\tan x) + \arctan x \cdot \frac{1}{\tan x} \cdot \sec^2 x \right)$$

(d) $(f^{-1})'(0)$ where $f(x) = \int_1^x \sqrt{3+t^3} dt \Rightarrow f'(x) \stackrel{\text{F.T.C}}{=} \sqrt{3+x^3}$ and $f(0) = 1$ (when $x=1$ integral is 0)

remember $(f^{-1})'(x) = \frac{1}{f'(f^{-1}(x))} \Rightarrow (f^{-1})'(0) = \frac{1}{\sqrt{3+(f^{-1}(0))^3}}$

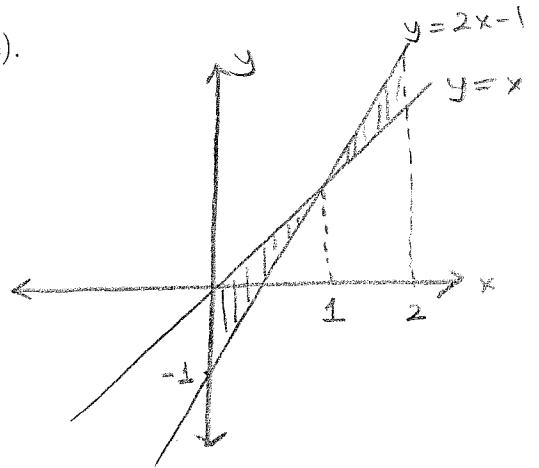
$$= \frac{1}{\sqrt{3+1}} = \frac{1}{2}$$

(e) $\frac{d}{dx} \left[\int_{\cos(2)}^{\sin(x)} \ln(\sqrt{t^2+t}) dt \right] \stackrel{\text{F.T.C}}{=} \ln(\sqrt{\sin^2(x)+\sin x}) \cdot \cos x$

4. (3x7pts) In the following parts, R is the region between $y = x$ and $y = 2x - 1$ from $x = 0$ to $x = 2$.

(a) Compute the area of the region R (described above).

$$\begin{aligned} \text{Area} &= \int_0^2 |(2x-1) - x| dx \\ &= \int_0^1 1-x dx + \int_1^2 x-1 dx \\ &= \left. x - \frac{x^2}{2} \right|_0^1 + \left. \frac{x^2}{2} - x \right|_1^2 \\ &= \left(\frac{1}{2} - 0 \right) + \left(0 - \left(-\frac{1}{2} \right) \right) = 1 \end{aligned}$$



(b) Compute the volume of R rotated around $y = -1$.

Using Disc Method;

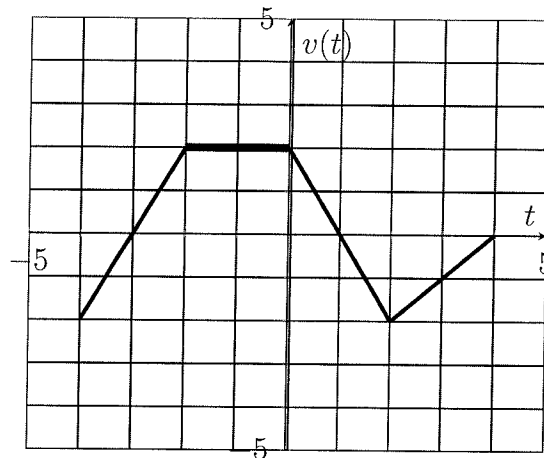
$$\begin{aligned} \text{Volume} &= \int_0^1 \pi \left[(x - (-1))^2 - ((2x-1) - (-1))^2 \right] dx + \int_1^2 \pi \left[((2x-1) - (-1))^2 - (x - (-1))^2 \right] dx \\ &= \pi \int_0^1 \left[(x+1)^2 - (2x)^2 \right] dx + \pi \int_1^2 \left[(2x)^2 - (x+1)^2 \right] dx \\ &= \pi \int_0^1 (x^2 + 2x + 1 - 4x^2) dx + \pi \int_1^2 (4x^2 - x^2 - 2x - 1) dx \\ &= \pi \left(-x^3 + x^2 + x \right) \Big|_0^1 + \pi \left(x^3 - x^2 - x \right) \Big|_1^2 \\ &= \pi (1 - 0) + \pi (2 - (-1)) = 4\pi \end{aligned}$$

(c) Compute the volume of R rotated around $x = -1$.

Using Shell Method;

$$\begin{aligned} \text{Volume} &= \int_0^1 2\pi (x - (-1)) (x - (2x-1)) dx + \int_1^2 2\pi (x - (-1)) ((2x-1) - x) dx \\ &= \int_0^1 2\pi (x+1)(1-x) dx + \int_1^2 2\pi (x+1)(x-1) dx \\ &= 2\pi \int_0^1 (1-x^2) dx + 2\pi \int_1^2 (x^2-1) dx \\ &= 2\pi \left(x - \frac{x^3}{3} \right) \Big|_0^1 + 2\pi \left(\frac{x^3}{3} - x \right) \Big|_1^2 \\ &= 2\pi \left(\frac{2}{3} - 0 \right) + 2\pi \left(\frac{2}{3} - \left(-\frac{2}{3} \right) \right) \\ &= \frac{4\pi}{3} + \frac{8\pi}{3} = 4\pi \end{aligned}$$

5. (4×3pts) The graph of a particle's vertical velocity function $v(t)$ is given below. Let $s(t)$ be the height of the particle at time t . Using this graph answer the following questions.



(a) Find the critical points of $s(t)$.

Since $s'(t) = v(t)$, critical points of $s(t)$ is where $v(t)$ is 0 or undefined. So, critical points are at $t = -3$, $t = 1$ and $t = 4$.

(b) Find local maximum and local minimum points of $s(t)$.

At the local max of $s(t)$; $s'(t)$ switches its sign from + to -.
 At the local min of $s(t)$; $s'(t)$ switches its sign from - to +.
 Since $s'(t) = v(t)$, local max of $s(t)$ at $t = 1$, local min of $s(t)$ at $t = 4$.

(c) Find the inflection points of $s(t)$.

At the inflection point of $s(t)$; $s''(t)$ switches from - to + or + to -.
 Since $s'(t) = v(t)$ we should check $v'(t)$; so inflection point of $s(t)$ is at $t = 2$.

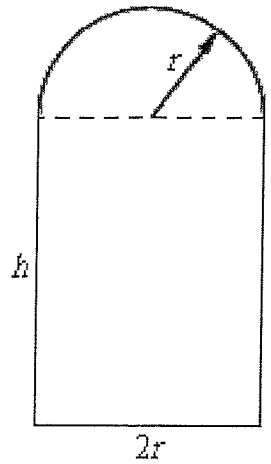
(d) If $s(-4) = 2$ then find $s(2)$.

$$\text{Using F.T.C; } s(2) - s(-4) = \int_{-4}^2 v(t) dt$$

$$s(2) - 2 = \underbrace{-\frac{2 \cdot 1}{2} + \frac{2 \cdot 1}{2} + 2 \cdot 2 + \frac{2 \cdot 1}{2} - \frac{2 \cdot 1}{2}}_{\text{by calculating the areas}}$$

$$\Rightarrow s(2) = 6$$

6. (15pts) An arched window is being built. The bottom of the window is a rectangle and the top is a semicircle. What dimensions for the window will give the largest total area, if only 4 meters of framing material are available for the perimeter?



$$\text{Length} = 2r + 2h + \pi r = 4 \Rightarrow h = \frac{4 - \pi r - 2r}{2}$$

$$\text{Area} = \frac{\pi r^2}{2} + 2rh = \frac{\pi r^2}{2} + 2r \left(\frac{4 - \pi r - 2r}{2} \right)$$

$$\text{Area as a function of } r: A(r) = -2r^2 + 4r - \frac{\pi r^2}{2}$$

That is defined in the interval $\left[0, \frac{4}{\pi+2}\right]$
 \uparrow when $h=0$.

$$\text{To find critical point; } A'(r) = -4r + 4 - 2\pi r = 0 \Rightarrow r = \frac{4}{4+\pi}$$

To decide absolute max, we check: $A(0) = 0$

$$A\left(\frac{4}{4+\pi}\right) = \frac{8}{4+\pi} \approx 1.12$$

$$A\left(\frac{4}{\pi+2}\right) = \frac{8\pi}{(\pi+2)^2} \approx 0.95$$

So, max area happens when;

$$r = \frac{4}{4+\pi} \quad \text{and} \quad h = \frac{4 - \frac{4\pi}{4+\pi} - \frac{8}{4+\pi}}{2} = \frac{4}{4+\pi}$$

Bonus. Find $f(x) \neq 0$ so that the region between $y = 0$ and $y = f(x)$ from $x = 1$ to $x = t$ has the same volume when rotated around $y = -1$ and when rotated around $x = -2$ (for all $t > 0$).

Volume integrals must be the same;

$$\int_1^t \pi ((f(x)+1)^2 - 1^2) dx = \int_1^t 2\pi (x-(-2)) f(x) dx$$

Using F.T.C;

$$\cancel{\pi} ((f(t)+1)^2 - 1) = 2\cancel{\pi} (t+2)f(t)$$

$$f(t)^2 + 2f(t) = 2tf(t) + 4f(t)$$

$$f(t)(f(t) - (2t+2)) = 0$$

So, $f(t) = 0$ or $f(t) = 2t+2$. Since $f(t) \neq 0$, then there is only one solution; $f(t) = 2t+2$.